

Name: _____

Date: _____

Math Patterns

Complete the sequence, find the rule.

① 72, 70, 68, 66, 64, 62, 60, ___ , ___

② 27, 32, 37, 42, 47, 52, 57, ___ , ___

③ 62, 64, 66, 68, 70, 72, 74, ___ , ___

④ 79, 73, 67, 61, 55, 49, 43, ___ , ___

⑤ 12, 16, 20, 24, 28, 32, 36, ___ , ___

⑥ 96, 90, 84, 78, 72, 66, 60, ___ , ___

⑦ 15, 17, 19, 21, 23, 25, 27, ___ , ___

⑧ 86, 79, 72, 65, 58, 51, 44, ___ , ___

⑨ 38, 43, 48, 53, 58, 63, 68, ___ , ___

⑩ 56, 51, 46, 41, 36, 31, 26, ___ , ___

Score: _____

Name: _____

Date: _____

Math Patterns

Complete the sequence, find the rule.

① 72, 70, 68, 66, 64, 62, 60, 58, 56 (- 2)

② 27, 32, 37, 42, 47, 52, 57, 62, 67 (+ 5)

③ 62, 64, 66, 68, 70, 72, 74, 76, 78 (+ 2)

④ 79, 73, 67, 61, 55, 49, 43, 37, 31 (- 6)

⑤ 12, 16, 20, 24, 28, 32, 36, 40, 44 (+ 4)

⑥ 96, 90, 84, 78, 72, 66, 60, 54, 48 (- 6)

⑦ 15, 17, 19, 21, 23, 25, 27, 29, 31 (+ 2)

⑧ 86, 79, 72, 65, 58, 51, 44, 37, 30 (- 7)

⑨ 38, 43, 48, 53, 58, 63, 68, 73, 78 (+ 5)

⑩ 56, 51, 46, 41, 36, 31, 26, 21, 16 (- 5)

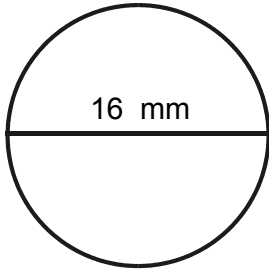
Score: _____

Name: _____

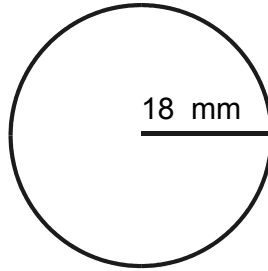
Date: _____

Measurement

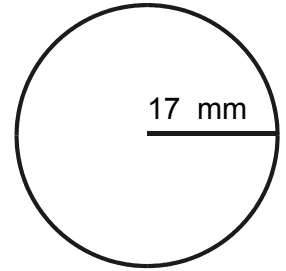
Find the circumference.



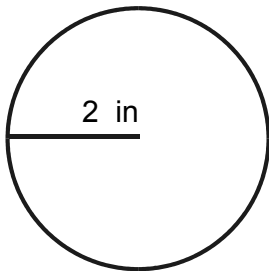
① _____



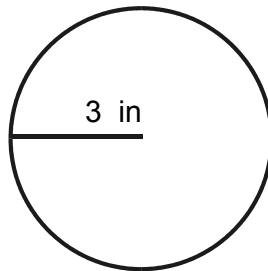
② _____



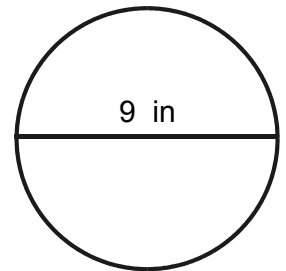
③ _____



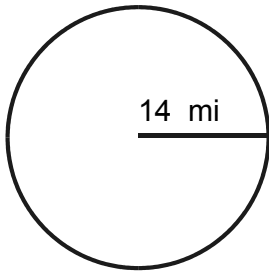
④ _____



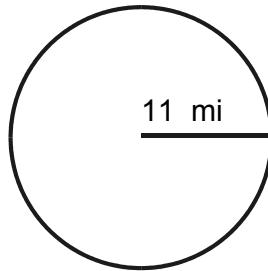
⑤ _____



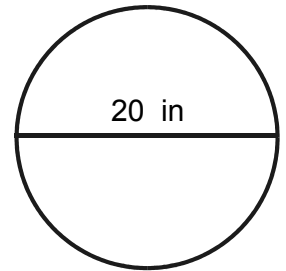
⑥ _____



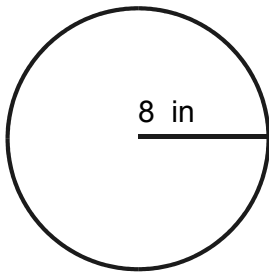
⑦ _____



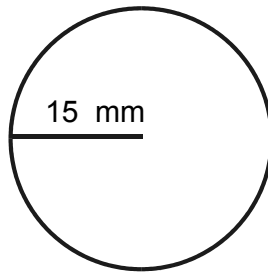
⑧ _____



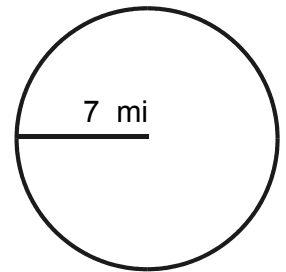
⑨ _____



⑩ _____



⑪ _____



⑫ _____

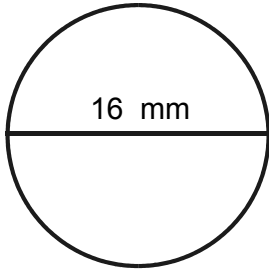
Score: _____

Name: _____

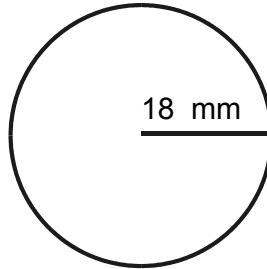
Date: _____

Measurement

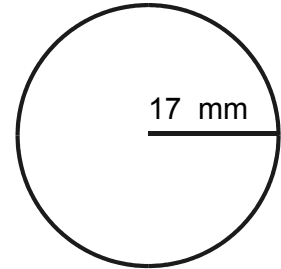
Find the circumference.



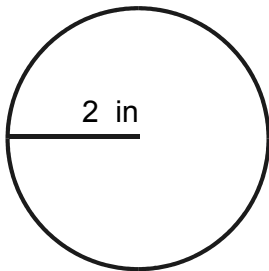
① $C=50.24$ mm



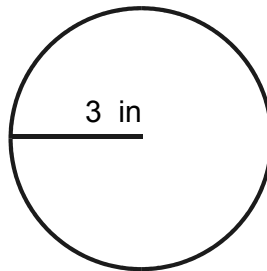
② $C=113.04$ mm



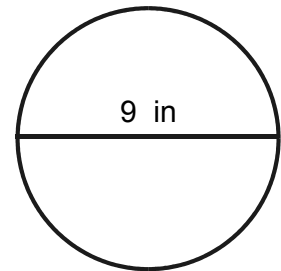
③ $C=106.76$ mm



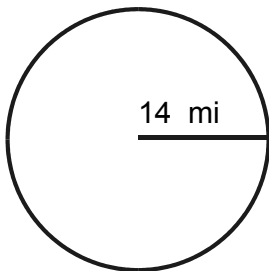
④ $C=12.56$ in



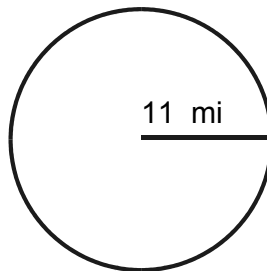
⑤ $C=18.84$ in



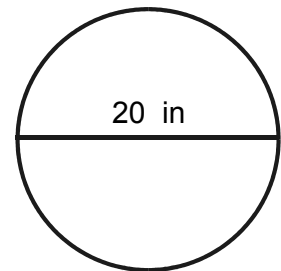
⑥ $C=28.26$ in



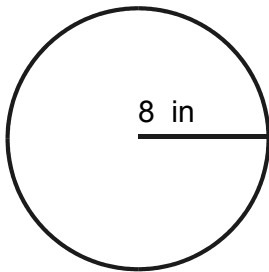
⑦ $C=87.92$ mi



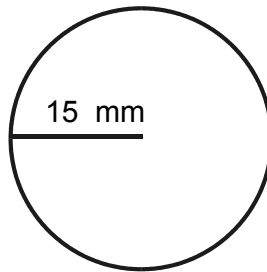
⑧ $C=69.08$ mi



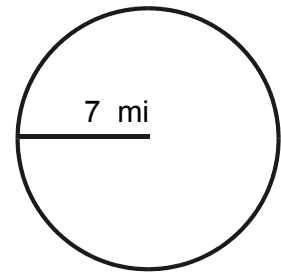
⑨ $C=62.8$ in



⑩ $C=50.24$ in



⑪ $C=94.2$ mm



⑫ $C=43.96$ mi

Score: _____